

Examen

- N: 1

Question with figure

A question may include a figure



Question with items

Which one of the following is correct ?

1. First answer
2. Second answer
3. Third answer
4. Fourth answer

Exercise

Please compute the hypotenuse of a triangle with sides 3 and 4.

Examen

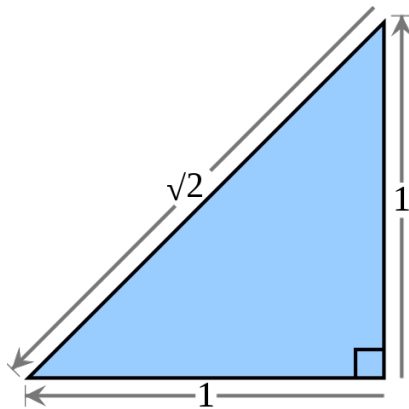
- N: 2

Another question

This question is easier than you think. Please provide a solution !!

Question with png

Another nice figure



Question with open answer

This is an open question, respond with a long answer

Examen

- N: 3

Question with figure

A question may include a figure



Question with items

Which one of the following is correct ?

1. First answer
2. Second answer
3. Third answer
4. Fourth answer

Exercise

Please compute the hypotenuse of a triangle with sides 3 and 4.

Examen

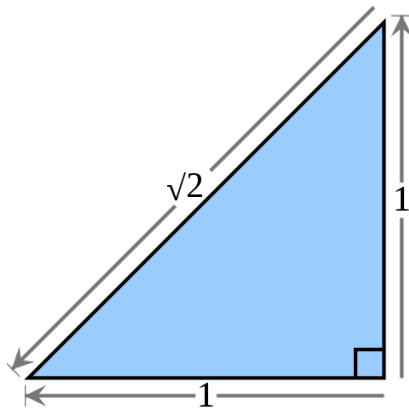
- N: 4

Another question

This question is easier than you think. Please provide a solution !!

Question with png

Another nice figure



Exercise

Please compute the hypotenuse of a triangle with sides 3 and 4.

Examen

- N: 5

Another question

This question is easier than you think. Please provide a solution !!

Question with items

Which one of the following is correct ?

1. First answer
2. Second answer
3. Third answer
4. Fourth answer

Question with open answer

This is an open question, respond with a long answer

Examen

- N: 6

Question

This is the first question, can you answer ?

Question with items

Which one of the following is correct ?

1. First answer
2. Second answer
3. Third answer
4. Fourth answer

Exercice

Please compute the hypotenuse of a triangle with sides 3 and 4.

Examen

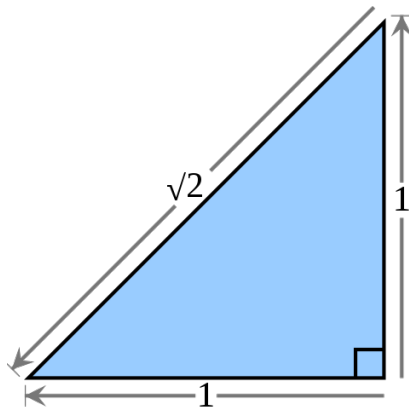
- N: 7

Question

This is the first question, can you answer ?

Question with png

Another nice figure



Question with open answer

This is an open question, respond with a long answer

Examen

- N: 8

Question

This is the first question, can you answer ?

Question with items

Which one of the following is correct ?

1. First answer
2. Second answer
3. Third answer
4. Fourth answer

Exercise

Please compute the hypotenuse of a triangle with sides 3 and 4.

Examen

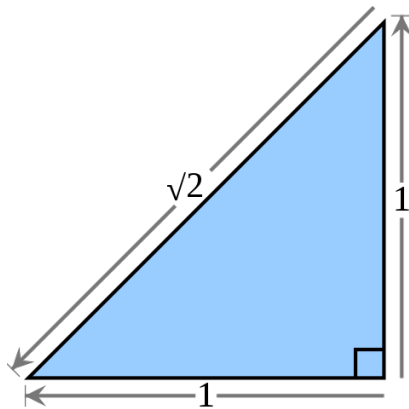
- N: 9

Question

This is the first question, can you answer ?

Question with png

Another nice figure



Exercice

Please compute the hypotenuse of a triangle with sides 3 and 4.

Examen

- N: 10

Question

This is the first question, can you answer ?

Question with items

Which one of the following is correct ?

1. First answer
2. Second answer
3. Third answer
4. Fourth answer

Question with open answer

This is an open question, respond with a long answer

Examen

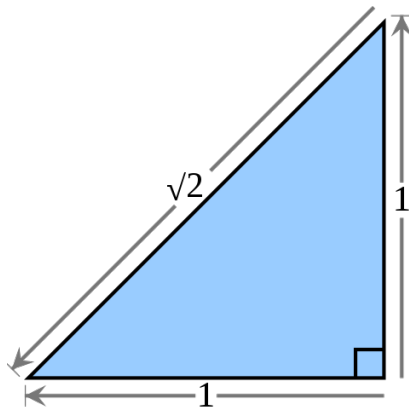
- N: 11

Another question

This question is easier than you think. Please provide a solution !!

Question with png

Another nice figure



Question with open answer

This is an open question, respond with a long answer

Examen

- N: 12

Question with figure

A question may include a figure



Question with items

Which one of the following is correct ?

1. First answer
2. Second answer
3. Third answer
4. Fourth answer

Question with open answer

This is an open question, respond with a long answer

Examen

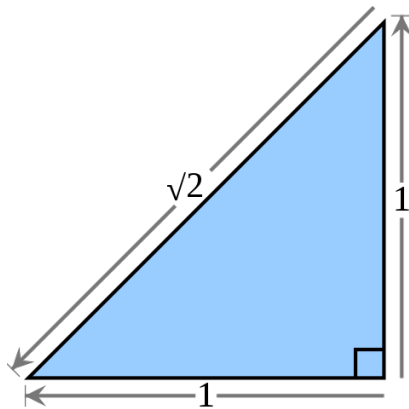
- N: 13

Question

This is the first question, can you answer ?

Question with png

Another nice figure



Exercice

Please compute the hypotenuse of a triangle with sides 3 and 4.

Examen

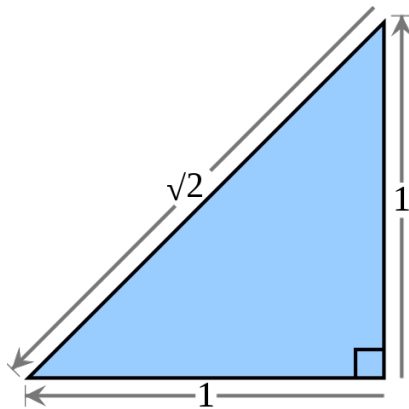
- N: 14

Another question

This question is easier than you think. Please provide a solution !!

Question with png

Another nice figure



Exercise

Please compute the hypotenuse of a triangle with sides 3 and 4.

Examen

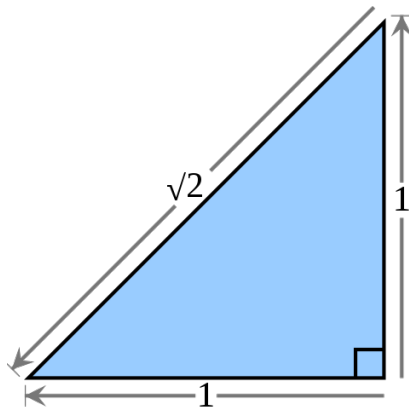
- N: 15

Another question

This question is easier than you think. Please provide a solution !!

Question with png

Another nice figure



Question with open answer

This is an open question, respond with a long answer

Examen

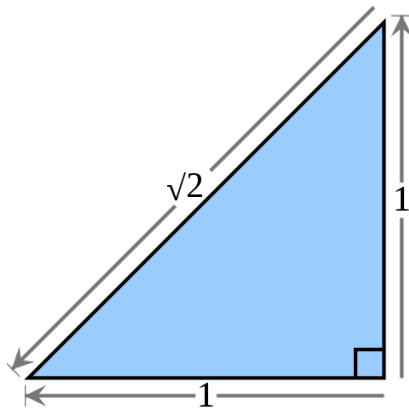
- N: 16

Question

This is the first question, can you answer ?

Question with png

Another nice figure



Question with open answer

This is an open question, respond with a long answer

Examen

- N: 17

Another question

This question is easier than you think. Please provide a solution !!

Question with items

Which one of the following is correct ?

1. First answer
2. Second answer
3. Third answer
4. Fourth answer

Question with open answer

This is an open question, respond with a long answer

Examen

- N: 18

Another question

This question is easier than you think. Please provide a solution !!

Question with items

Which one of the following is correct ?

1. First answer
2. Second answer
3. Third answer
4. Fourth answer

Exercise

Please compute the hypotenuse of a triangle with sides 3 and 4.

Examen

- N: 19

Question

This is the first question, can you answer ?

Question with items

Which one of the following is correct ?

1. First answer
2. Second answer
3. Third answer
4. Fourth answer

Question with open answer

This is an open question, respond with a long answer

Examen

- N: 20

Question with figure

A question may include a figure



Question with items

Which one of the following is correct ?

1. First answer
2. Second answer
3. Third answer
4. Fourth answer

Exercise

Please compute the hypotenuse of a triangle with sides 3 and 4.

Examen

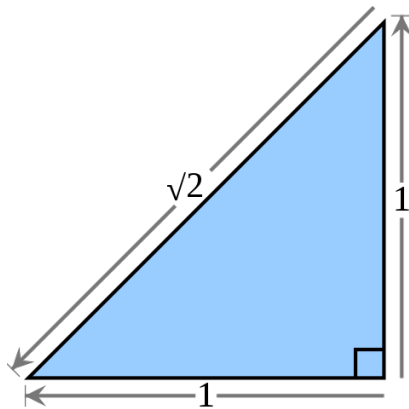
- N: 21

Question

This is the first question, can you answer ?

Question with png

Another nice figure



Exercice

Please compute the hypotenuse of a triangle with sides 3 and 4.

Examen

- N: 22

Another question

This question is easier than you think. Please provide a solution !!

Question with items

Which one of the following is correct ?

1. First answer
2. Second answer
3. Third answer
4. Fourth answer

Question with open answer

This is an open question, respond with a long answer

Examen

- N: 23

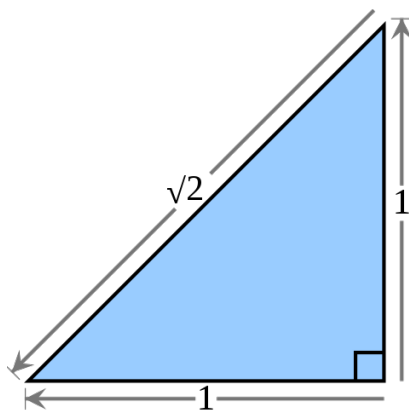
Question with figure

A question may include a figure



Question with png

Another nice figure



Exercise

Please compute the hypotenuse of a triangle with sides 3 and 4.

Examen

- N: 24

Question with figure

A question may include a figure



Question with items

Which one of the following is correct ?

1. First answer
2. Second answer
3. Third answer
4. Fourth answer

Exercise

Please compute the hypotenuse of a triangle with sides 3 and 4.

Examen

- N: 25

Question with figure

A question may include a figure



Question with items

Which one of the following is correct ?

1. First answer
2. Second answer
3. Third answer
4. Fourth answer

Question with open answer

This is an open question, respond with a long answer

Examen

- N: 26

Another question

This question is easier than you think. Please provide a solution !!

Question with items

Which one of the following is correct ?

1. First answer
2. Second answer
3. Third answer
4. Fourth answer

Question with open answer

This is an open question, respond with a long answer

Examen

- N: 27

Another question

This question is easier than you think. Please provide a solution !!

Question with items

Which one of the following is correct ?

1. First answer
2. Second answer
3. Third answer
4. Fourth answer

Exercise

Please compute the hypotenuse of a triangle with sides 3 and 4.

Examen

- N: 28

Question

This is the first question, can you answer ?

Question with items

Which one of the following is correct ?

1. First answer
2. Second answer
3. Third answer
4. Fourth answer

Exercise

Please compute the hypotenuse of a triangle with sides 3 and 4.

Examen

- N: 29

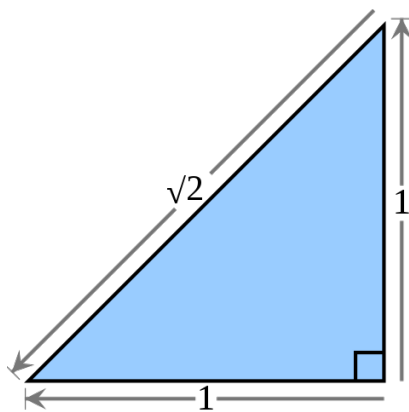
Question with figure

A question may include a figure



Question with png

Another nice figure



Exercise

Please compute the hypotenuse of a triangle with sides 3 and 4.

Examen

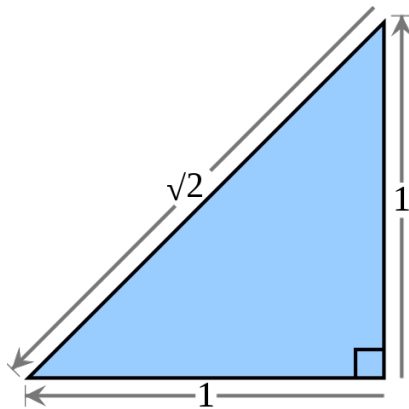
- N: 30

Question

This is the first question, can you answer ?

Question with png

Another nice figure



Question with open answer

This is an open question, respond with a long answer

